

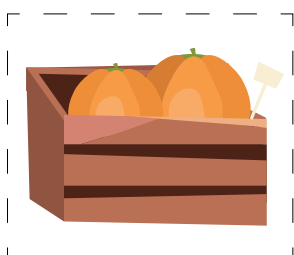







Full name: .....

TASK:

Cut out the pictures at the bottom of the page and stick them on according to the instructions: place the bananas under the stall roof, the scale on the counter, the watermelon crate to the right of the empty crate, the pumpkin crate under the tomatoes, the sun above the stall roof and the cat above the carrot crate.



Full name: .....

**TASK:**

Cross off as much money next to each product as you need to buy that item. Count how much money is left.




**9 £**






**15 £**






**21 £**






**27 £**




Full name: .....

**TASK:**

Group the products into two sets: one - up to £ 10 per item, the other - above £ 10.



15 £



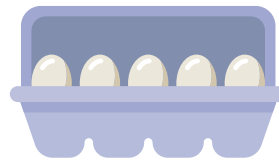
8 £



3 £



12 £



7 £



11 £



4 £



2 £



15 £



6 £